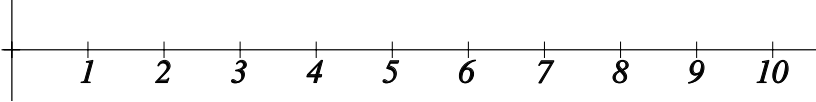


Drawing lines

Name: _____ Class: _____ Date: _____

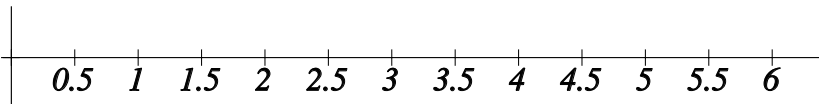
Mark / 8 %

1) Draw a line that is 8 units long.



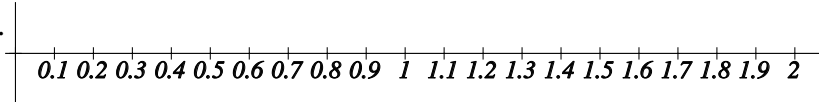
[1]

2) Draw a line that is $2\frac{1}{2}$ units long.



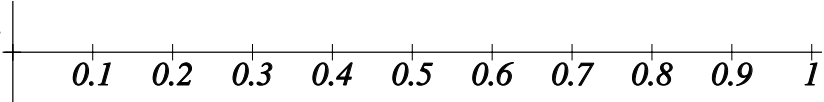
[1]

3) Draw a line that is 1.1 units long.



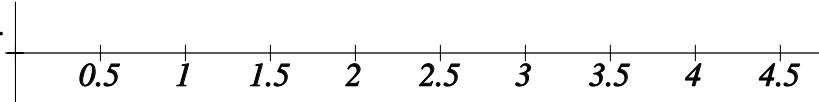
[1]

4) Draw a line that is 0.45 units long.



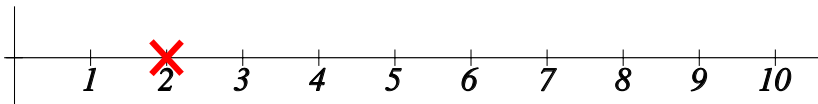
[1]

5) Draw a line that is 3.2 units long.



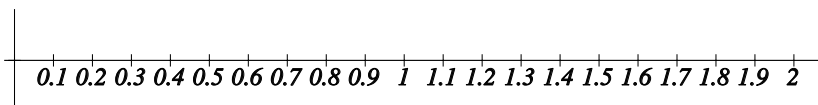
[1]

6) Draw a line that is 3 units long, starting at the cross (X) marked on the scale.



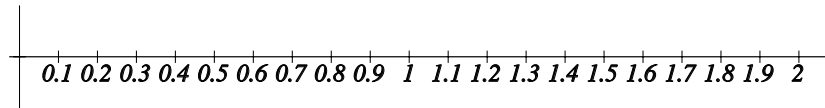
[1]

7) Draw a line that is 0.8 units long, starting at 0.2.



[1]

8) Draw a line that is 0.8 units long, starting at 0.3.



[1]

Solutions for the assessment Drawing lines

